

1.



1. Clydesdale

2. Percheron

3. Hackney

4. **Friesian**

2.



1. Clydesdale

3. Arabian

2. Paint

4. Morgan

3.



provided by Alan Cheese

1. Morgan

3. Arabian

2. **Shire**

4. Shetland Pony

4.




1. Morgan

3. Arabian

2. American Saddlebred

4. Tennessee Walking Horse

5.



1. Morgan

3. Suffolk

2. Haflinger

4. Tennessee Walking Horse

6.



1. Oldenburg

3. Suffolk

2. Haflinger

4. **Arabian**

7.



1. Tennessee Walking Horse

3. Suffolk

2. Thoroughbred

4. Quarter Horse

8.



1. Clydesdale

2. Lippizan

3. **Thoroughbred**

4. Arabian

9.



1. Haflinger

3. Thoroughbred

2. **Bashkir Curly**

4. Arabian

10.



1. Suffolk

3. Percheron

2. Clydesdale

4. **Shetland Pony**

11.



What type of bit is this?

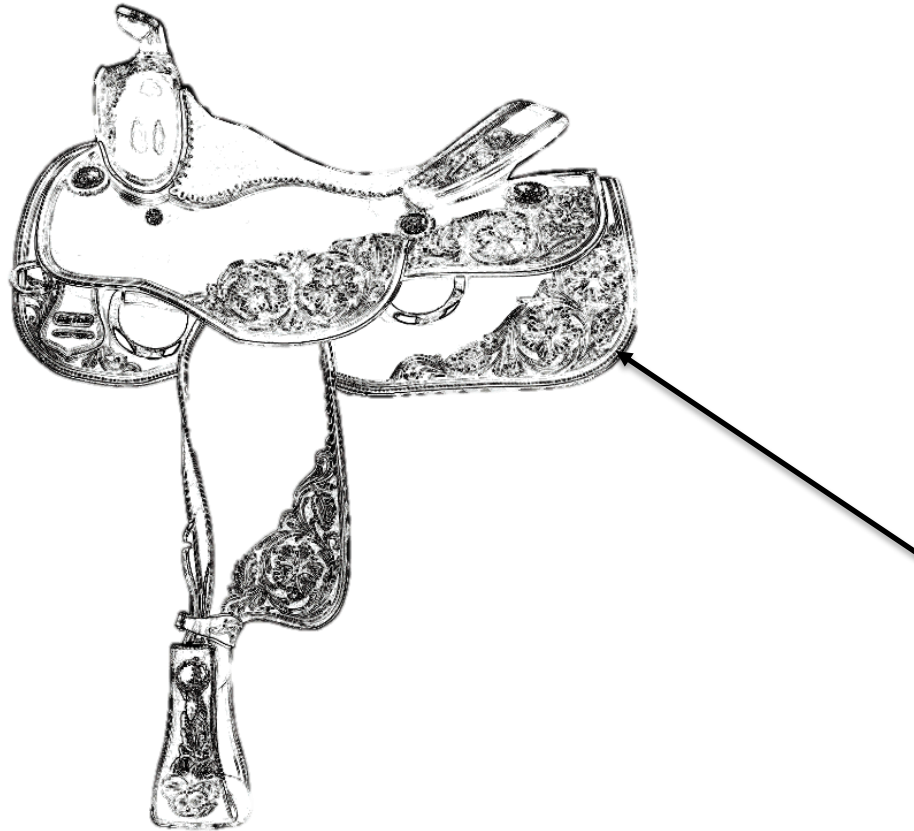
1. Kimberwick

2. D- Ring Snaffle

3. Pelham

4. Smooth Snaffle

12.



Identify the piece of the saddle is indicated with the arrow.

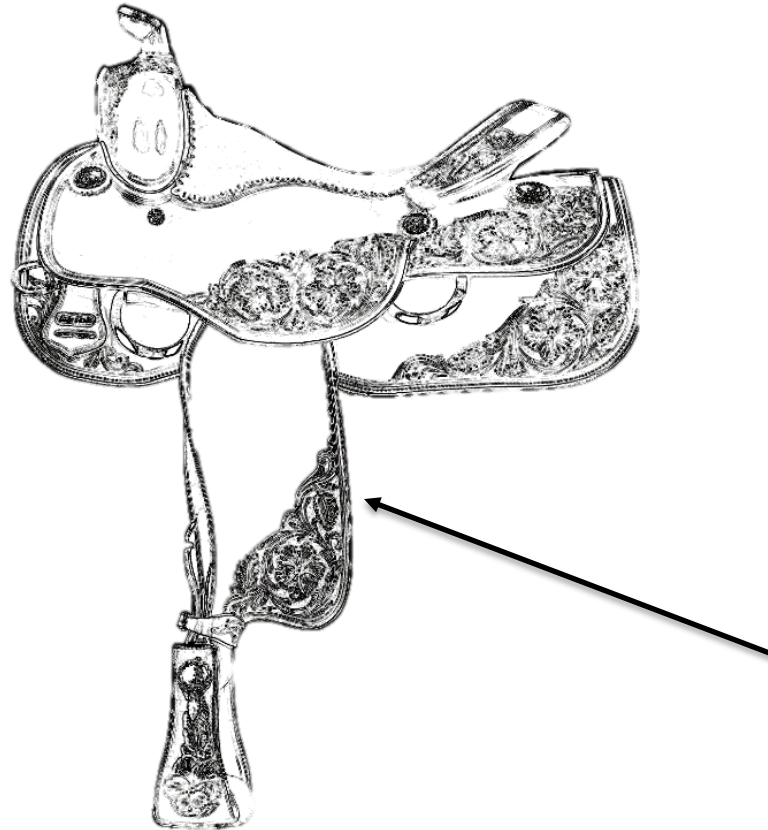
1. Fender

2. Horn

3. Skirt

4. Seat

13.



Identify the piece of the saddle is indicated with the arrow.

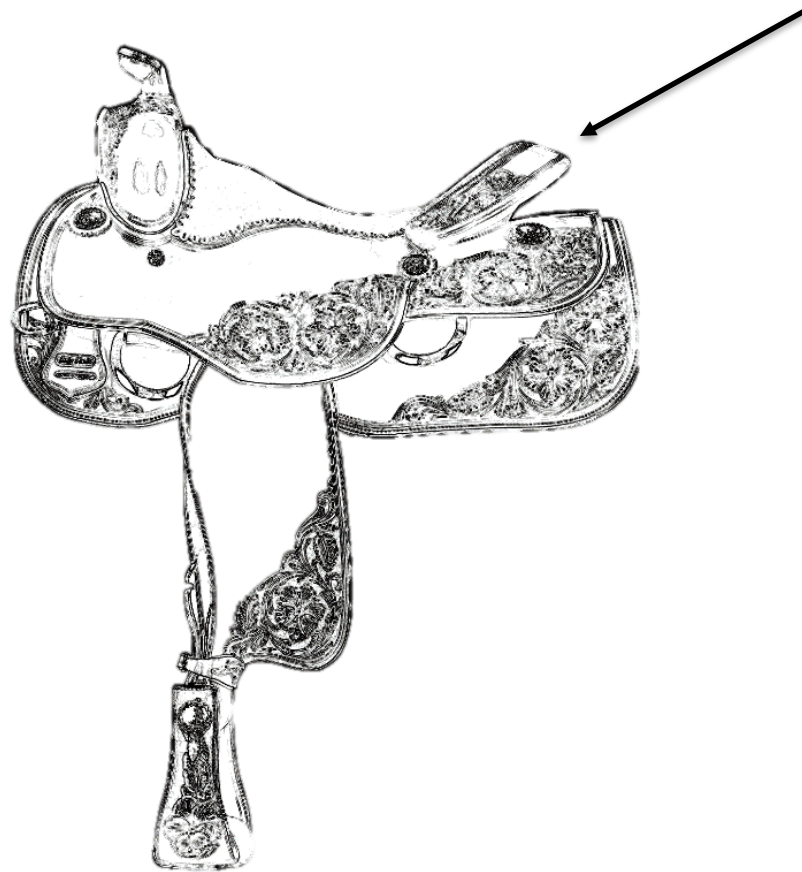
1. Skirt

2. Cantle

3. Stirrup

4. **Fender**

14.



Identify the piece of the saddle is indicated with the arrow.


1. Fender

2. Skirt

3. Cantle

4. Stirrup

15.



What is the coat color pattern seen here?

1. Bay Tobiano

2. Bay Overo

3. Sorrel Tobiano

4. Sorrel Overo

16.



What is the coat color pattern seen here?

1. Bay Tobiano

2. Bay Overo

3. Sorrel Tobiano

4. Sorrel Overo

17.



What is the coat color seen here?

1. Grey

2. **Buckskin**

3. Grulla

4. Dun

18.



What is the coat color seen here?

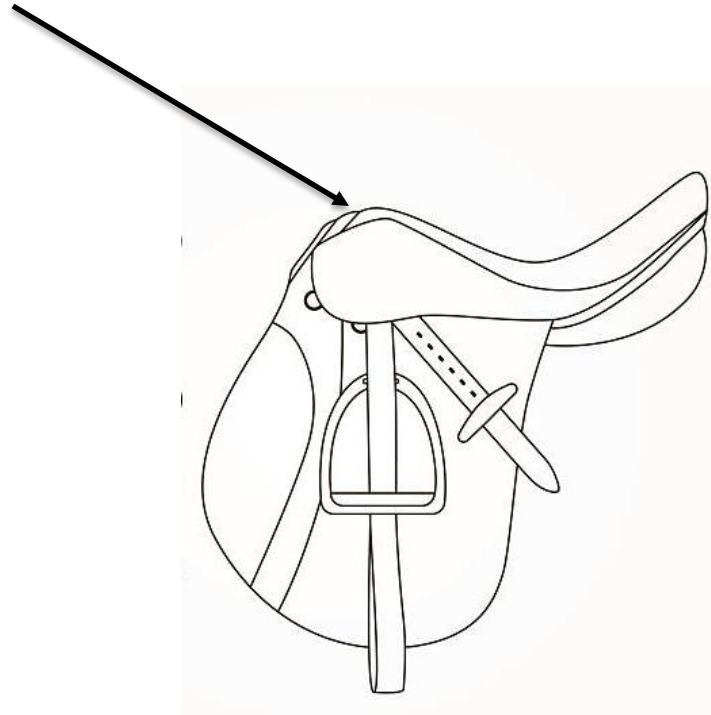
1. Bay Roan

2. Blue Roan

3. Cremello

4. Dun

19.



Identify piece of the saddle indicated with the arrow.

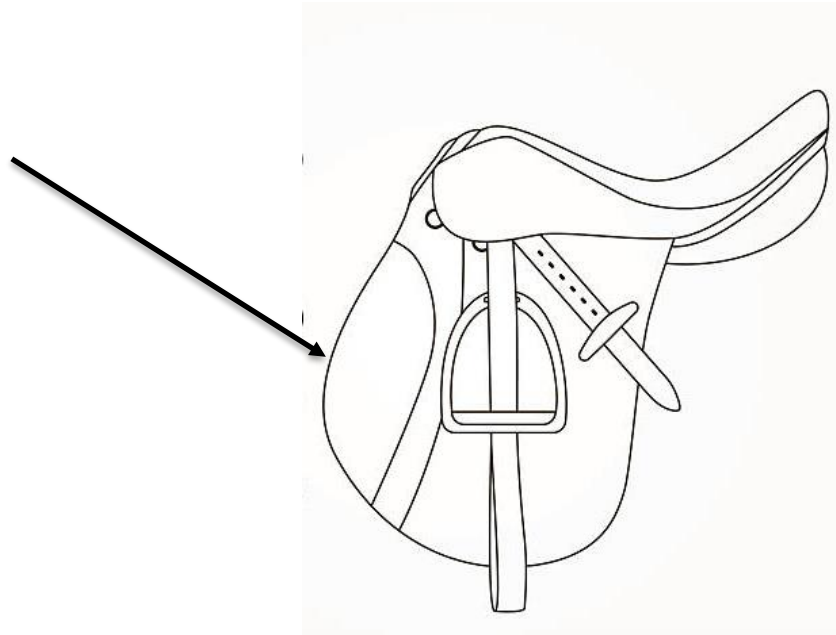
1. Seat

2. Pommel

3. Knee Roll

4. Cantle

20.



Identify the piece of the saddle indicated with the arrow.

1. Pommel

2. Cantle

3. Seat

4. **Knee Roll**